


RAINBOW INTERNATIONAL SCHOOL


**SUMMER HOLIDAY
HOMEWORK**

(2024-25)



NAME: - _____

CLASS: - _____



RAINBOW INTERNATIONAL SCHOOL
HOLIDAY WORKSHEET
SUBJECT-ENGLISH
GRADE-3
ENGLISH (LITERATURE)

I. Use the following words and make sentences:-

- a. God-
- b. Worship-
- c. Pond-
- d. Clever-
- e. Miser-
- f. Happy-
- g. Rudely-
- h. Hunting-
- i. Beggar-
- j. Dry-

II. Who said following statement:-

- a. "Get away, you lazy fellow_____.
- b. "Dear friends, I am much worried for you._____
- c. "You are most welcome, Sir._____
- d. "Are you speaking the truth? Is there really any pond full of water? Will you carry us there?"_____
- e. "Go away, you idle beggar!"_____

III. Answer the following questions:-

- a. Who lived in a pond?
- b. How many characters are there in the chapter "Good always wins?"
- c. Why did the pond begin to dry up?
- d. Who was fond of hunting animals?
- e. Who was very clever?
- f. Who had ragged clothes on his body?
- g. Who had lost the way?

IV. Write and learn the word meanings of Ch-1,2 &3

V. Circle the odd one out:-

- a. Fish Pond Crab Crane
- b. Rudely Harshly Kindly drink
- c. Father Brother God Uncle
- d. Beak open down up
- e. Sea lake first river

VI. Learn the question and answers of Ch-1,2 &3

NB: Write it in your CB copy

GRAMMAR

1. Put the following words in alphabetical order:

- | | | | | |
|------------|--------|--------|---------|--------|
| 1) Blank | black | blade | blame | blaze |
| _____ | _____ | _____ | _____ | _____ |
| 2) Chair | chain | change | chase | chance |
| _____ | _____ | _____ | _____ | _____ |
| 3) Crazy | creak | cramp | crate | craft |
| _____ | _____ | _____ | _____ | _____ |
| 4) Drain | drab | drop | drip | drama |
| _____ | _____ | _____ | _____ | _____ |
| 5) Fluke | flight | flinch | flick | flood |
| _____ | _____ | _____ | _____ | _____ |
| 6) Scratch | scram | scroll | screech | scrap |
| _____ | _____ | _____ | _____ | _____ |

2. If you look keenly, the sentences given below may look odd! Can you arrange them properly?



Country my India is



Father car washed the



We play everyday garden in the



Seema best friend my is

3. Write five lines on

i) My school

ii) My favourite game

NB: Write it in your GB copy

MATHS

WORKSHEET-1

CHOOSE THE CORRECT OPTION:

Q1. Which place should we compare to determine the greater of the given numbers? 243608 and 243698? _____

a) Tens b) hundreds c) thousands d) ones

Q2. The numeral for $6000 + 30 + 5$ is _____

a) 6305 b) 6035 c) 635 d) 653

FILL IN THE BLANKS:

Q3. The smallest 4-digit number is _____

Q4. The successor of 5139 is _____

Q5. Write the smallest 4-digit number using the digits 9, 2, 8 and 0 only once.

Q6. Write the number name of 4619.

MATHS WORKSHEET-2

Q1. Draw an abacus and show the place value of the coloured digit in

9 0 7 5.

Q2. Write the expanded form of 6734 in two ways.

Q3. Compare using $>$, $<$, $=$

a) 1389 _____ 1938

b) 2020 _____ 2002

c) 999 _____ 9099

Q4. a) Write the successor of the largest 3-digit number.

b) Write the predecessor of the smallest 4-digit number.

Q5. Trees play a very important role in our life. On the Vanmahotsav Day each Child of class II and III was asked to bring a sapling in a pot. Class II and III Brought 95 saplings and 150 saplings respectively.

a) Which class brought more sapling and how much?

b) What values reflected by the students here?

MATHS WORKSHEET-3

CHOOSE THE CORRECT OPTION:

Q1. If the places of the digits 5 and 6 are interchanged in the numeral 5176, then the new numeral is

-

a) 1756 b) 6175 c) 7165 d) 7561

Q2. The sum of the place values of 3 in 3438 is _____

b) 3000 b) 3300 c) 3030 d) none of these

FILL IN THE BLANKS:

Q3. The numeral for $5000 + 4$ is _____

Q4. The place value of 0 in 7048 is _____

Write True or False

Q5. 10 more than 2980 is 2990. _____

Q6. The greatest four digit number is 1000. _____

SUBJECT-S.ST






I. Multiple choice question:-

- a) Planets move around the sun in their own_____.
- i) Galaxy ii) Line iii) Solar system iv) Orbit
- b) _____ has the most number of natural satellites.
- i) Earth ii) Saturn iii) Mars iv) Jupiter
- c) A model of the Earth is called a _____.
- i) Map ii) globe iii) atlas iv) compass
- d) A book of maps is called an/a _____.
- i) Atlas ii) compass iii) globe iv) dictionary
- e) Day and night on Earth is caused because of _____.
- i) Revolution ii) Rotation iii) atmosphere iv) water
- f) The layer of air surrounding the Earth is called_____.
- i. Gas ii) oxygen iii) atmosphere iv) carbon dioxide
- g) What is horizon?
- i. Heavenly objects which revolve round the Sun
- ii. The envelope of air which surrounds the Earth
- iii. Home of all living beings
- iv. The place where the Earth and the sky seem to meet
- h) How much time the earth takes to go around the Sun?
- i. One month
- ii. One year
- iii. One hour
- iv. One week
- i) Who was the first person to walk on the moon?
- i) Neil Armstrong
- ii) Kalpana Chawala
- iii) Galileo
- iv) A.P.J. Abdul Kalam
- j) Who was the first man to go round the world?
- i) Neil Armstrong
- ii) Christopher Columbus
- iii) Leif Eriksson
- iv) Ferdinand Magellan
- k) How many planets are there in the solar system?
- i) 6
- ii) 7
- iii) 8
- iv) 9

II. Answer the following questions:-

- a) What is atmosphere?
- b) What is rotation of the Earth?
- c) What is a compass?
- d) Which movement of the Earth causes seasons?
- e) State the differences between a map and a globe.
- f) Name the seven continents of the world.
- g) Name the five oceans of the world.
- h) What is the shape of the Earth?
- i) State the differences between an ocean and a continent.
- j) State the differences between a rotation and revolution?

III. Match the following:-

A	B
1. Sun	
2. Thar Desert	
3. Globe	
4. Solar System	
5. Compass	

IV. Fill in the blanks:-

- There are _____ types of landforms in India.
- _____ is the largest and deepest ocean.
- The Earth is called the _____.
- India lies in this continent _____.
- India is a _____ and _____ country.

V. State whether True or False:-

- The Earth is round like a ball. []
- Ferdinand Magellan started on a journey from England. []
- The Earth and sky never meet but they just seem to meet at one point. []
- The Earth has three movements. []
- Around three-fourths of the Earth is covered with land and only one-fourth is water. []


Match the following :

- World Map
- Globe
- Atlas
- Compass
- Oceans
- Continents
- Very large water bodies.
- Very large areas of land.
- An instrument used to find directions
- A flat drawing of the whole surface of earth.
- A book of maps.
- A model of the Earth.

Draw or paste the pictures of the following.



A globe with axis



A compass with directions

Subject: Science

1. Draw three pictures of non-living things once were alive.
2. How does plant breathe?
3. Observe a fish in an aquarium, how it swims in water?
4. Write the difference between living and non-living things.
5. Fun project: let's have some fun, complete the parts of plant diagram by using colour paper, thread, paper cut pieces, colour etc.

The reference image is given below

(Do it in your science copy)



HINDI

1. प्रतिदिन हिंदी पाठ्यक्रम में से एक पाठ पढ़ना।
2. प्रतिदिन समाचार पत्र पढ़ना।
3. पाँच पृष्ठ सुलेख लिखना।
4. एक पौधा लगाना और प्रतिदिन उसमें पानी देना।
5. पेड़ - पौधों से लाभ :- इस विषय पर 10 वाक्य लिखना।
6. तुक वाले शब्दों को रेखा से मिलाना।

मटका

.

जाओ

पाओ

कुतरो

मरोड़ो

झटका

उतरो

.

मनचाही

तबाही.

सिकोडो

{Do in Hindi grammar copy}

ODIA

1. छुफ बहिर घा० न° २ रे थ्वा कविताठिक्कु मूखस कर् ।

2. गुरासु रतु विषमरे २० धाडि लेख ।

3. घृषा न° २२ रे थ्वा न° ८ र छविक्कु देखु ता विषमरे घाशुठि वाक्य लेख ।

4. तले दिथायाळथ्वा शब्दक्कु नेळ वाक्यरे वयवहार कर ।

ठरुषा -----

घोजना -----

वारधार -----

वयसु -----

5. तले थ्वा शब्दगुठिकर प्रुठिशब्द लेख ।

जनन1 -----

मधुर -----

घष1 -----